

4.2. The Definite Integral

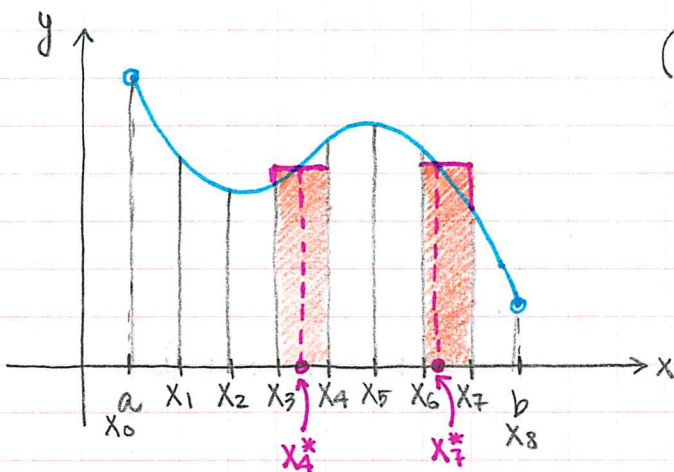
Riemann Sums: To estimate the area under the graph of $y = f(x)$ b/w $x = a$ & $x = b$:

- Divide the interval $[a, b]$ into n subintervals of width $\Delta x = \frac{b-a}{n}$.
- Let $x_0 = a, x_1, x_2, \dots, x_n = b$ be the endpoints of the intervals;
- In each subinterval $[x_{i-1}, x_i]$ choose a sample point (x_i^*) .

Provided the limit below exists:

$$\int_a^b f(x) dx := \sum_{i=1}^n f(x_i^*) \Delta x$$

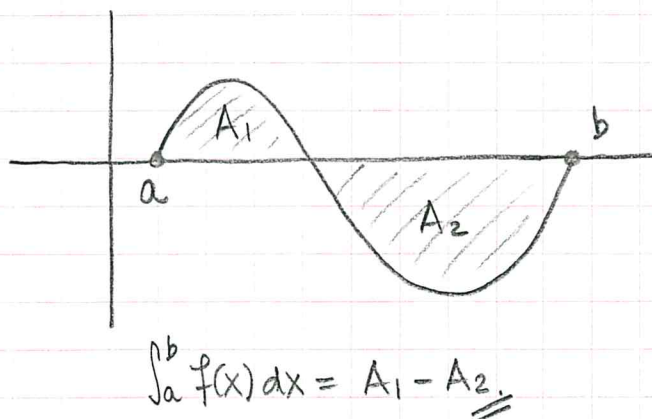
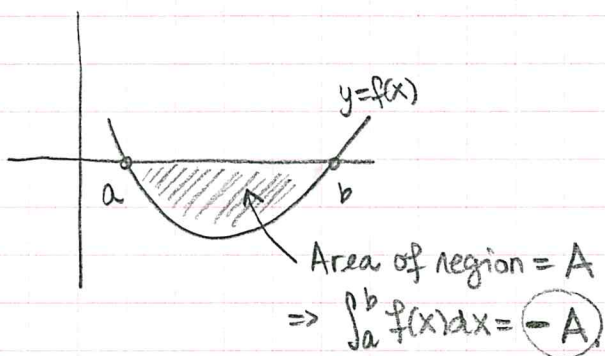
$$= \lim_{n \rightarrow \infty} \sum_{i=1}^n f(x_i^*) \Delta x$$



(The resulting limit must be the same regardless of the choice of sample pts. x_i^*)

Thm \therefore If f is continuous on $[a, b]$, or has only a finite number of jump discontinuities, then f is integrable on $[a, b]$ - i.e. $\int_a^b f(x) dx$ exists.

Signed Area: $\int_a^b f(x) dx$ is the "signed" area under the graph of $y = f(x)$, i.e. if f takes negative values, the integral computes "negative area":



Properties of the definite integral:

$$\int_a^b f(x) dx = - \int_b^a f(x) dx$$

$$\int_3^1 f(x) dx = - \int_1^3 f(x) dx.$$

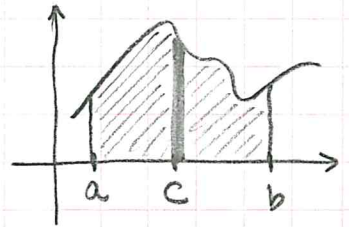
because, if $a > b$, the Δx changes from $\frac{b-a}{n}$ to $\frac{a-b}{n}$.

$$\int_a^a f(x) dx = 0$$

$$\int_a^b (f(x) \pm g(x)) dx = \int_a^b f(x) dx \pm \int_a^b g(x) dx$$

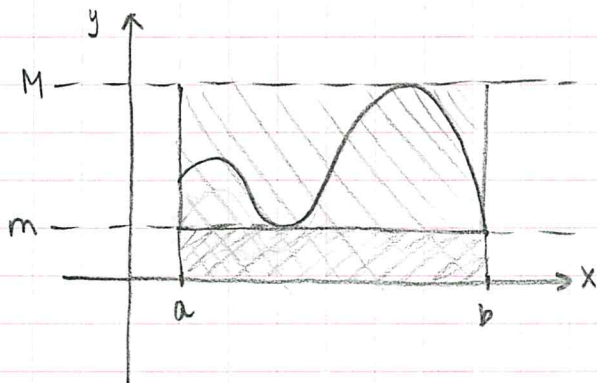
$$\int_a^b c \cdot f(x) dx = c \cdot \int_a^b f(x) dx$$

$$\text{If } a < c < b, \text{ then } \int_a^b f(x) dx = \int_a^c f(x) dx + \int_c^b f(x) dx$$



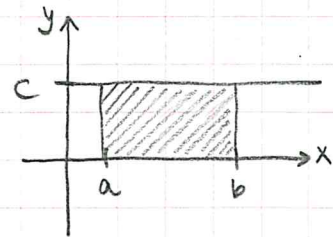
$$\text{If } f(x) \geq g(x) \text{ for } a \leq x \leq b, \text{ then } \int_a^b f(x) dx \geq \int_a^b g(x) dx$$

$$\text{If } m \leq f(x) \leq M \text{ for } a \leq x \leq b, \text{ then } m(b-a) \leq \int_a^b f(x) dx \leq M(b-a)$$

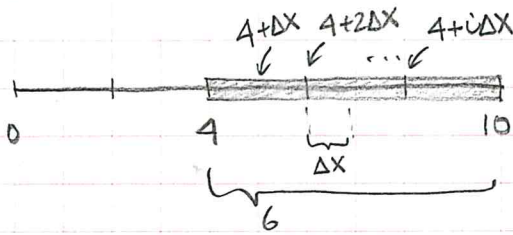


because

$$\int_a^b c dx = c(b-a)$$



$$\textcircled{1} \lim_{n \rightarrow \infty} \sum_{i=1}^n \sqrt{4 + \frac{6i}{n}} \cdot \frac{6}{n} = \int_4^{10} f(x) dx. \quad f(x) = ?$$



$$\Delta x = \frac{10-4}{n} = \frac{6}{n}$$

$$f(4+i\Delta x) = \sqrt{4 + \frac{6i}{n}} = \sqrt{4 + i \cdot \frac{6}{n}}$$

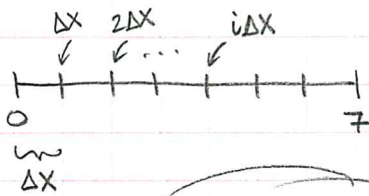
$$f(4+i\Delta x) = \sqrt{4 + i\Delta x}$$

$$\Rightarrow f(x) = \sqrt{x}$$

$$\textcircled{2} \lim_{n \rightarrow \infty} \sum_{i=1}^n \frac{1}{3 + \frac{7i}{n}} \cdot \frac{7}{n} = \int_a^b f(x) dx.$$

(Infinitely many choices here). (what is fixed is we should take $b-a=7$).

Example: Take $a=0, b=7, \infty \Delta x = \frac{7}{n}$

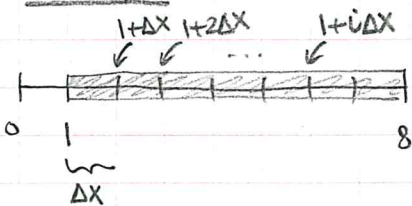


$$f(i\Delta x) = \frac{1}{3 + \frac{7i}{n}} = \frac{1}{3 + i \frac{7}{n}}$$

$$f(i\Delta x) = \frac{1}{3 + i\Delta x} \Rightarrow f(x) = \frac{1}{3+x}$$

$$\Rightarrow \int_0^7 \frac{1}{3+x} dx$$

Example: Take $a=1, b=8, \infty \Delta x = \frac{7}{n}$.



$$f(1+i\Delta x) = \frac{1}{3 + \frac{7i}{n}} = \frac{1}{3 + i\Delta x} = \frac{1}{2+1+i\Delta x}$$

$$f(1+i\Delta x) = \frac{1}{2+(1+i\Delta x)} \Rightarrow f(x) = \frac{1}{2+x}$$

$$\Rightarrow \int_1^8 \frac{1}{2+x} dx$$

3 Evaluate using areas: $\int_{-6}^6 \sqrt{36-x^2} dx$.

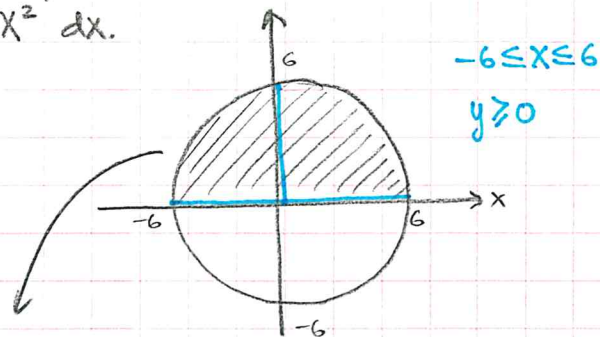
$$y = \sqrt{36-x^2} \Rightarrow y \geq 0$$

$$y^2 = 36-x^2$$

$$x^2 + y^2 = 36$$

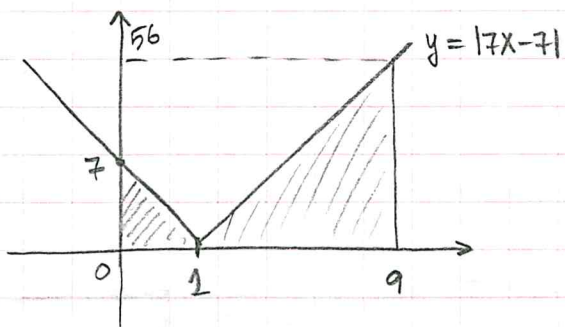
Circle centered @ origin w/ radius 6.

$$\int_{-6}^6 \sqrt{36-x^2} dx = 18\pi$$



Area of half-circle: $\frac{1}{2} \cdot \pi r^2 = \frac{1}{2} \pi \cdot 36 = 18\pi$

4 Same with $\int_0^9 |7x-7| dx$.



$$\int_0^9 |7x-7| dx = \int_0^1 |7x-7| dx + \int_1^9 |7x-7| dx$$

$$= \frac{1}{2}(1 \cdot 7) + \frac{1}{2}(8 \cdot 56)$$

$$= \frac{7}{2} + 4 \cdot 56$$

5 Given that $3 \leq f(x) \leq 4$ for $-7 \leq x \leq 7$, find the best possible estimation for $\int_{-7}^7 f(x) dx$.

$$3 \cdot 14 = 3(7 - (-7)) \leq \int_{-7}^7 f(x) dx \leq 4(7 - (-7)) = 4 \cdot 14$$